




Name _____

Make Groups of Ten


Directions: Circle and make groups of ten for each box. Then write how many objects there are in all.



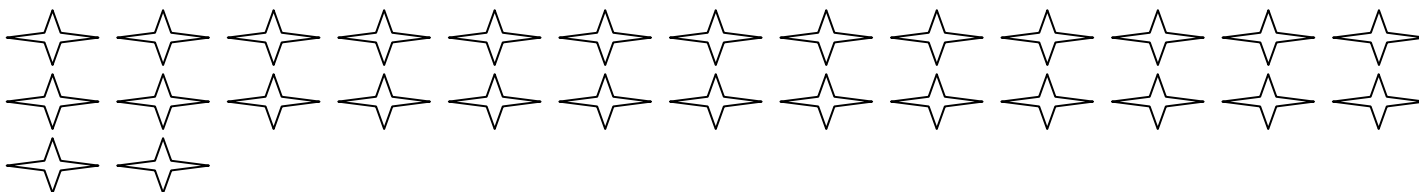
How many groups of ten did you make? _____ How many stars are there in all? _____



How many groups of ten did you make? _____ How many smiley faces are there in all? _____



How many groups of ten did you make? _____ How many hearts are there in all? _____



How many groups of ten did you make? _____ How many stars are there in all? _____