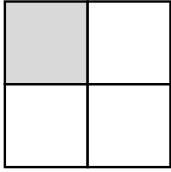


MATH FRACTIONS



2/3

Circle the fraction that represents the shaded part of the whole:

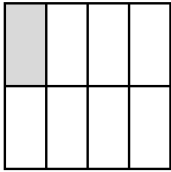


$$\frac{1}{2}$$

$$\frac{3}{4}$$

$$\frac{1}{4}$$

$$\frac{2}{6}$$

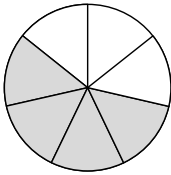


$$\frac{2}{4}$$

$$\frac{7}{8}$$

$$\frac{3}{8}$$

$$\frac{1}{8}$$




$$\frac{4}{7}$$

$$\frac{2}{3}$$

$$\frac{4}{8}$$

$$\frac{3}{7}$$

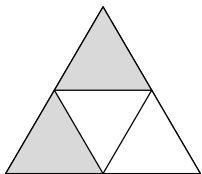


$$\frac{5}{5}$$

$$\frac{4}{6}$$

$$\frac{1}{5}$$

$$\frac{4}{5}$$

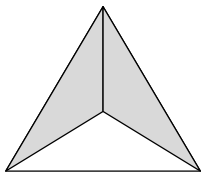


$$\frac{3}{4}$$

$$\frac{2}{2}$$

$$\frac{1}{2}$$

$$\frac{1}{4}$$



$$\frac{2}{3}$$

$$\frac{1}{3}$$

$$\frac{3}{3}$$

$$\frac{3}{2}$$